

**D.A.V. Public School, DVC MTPS, Bankura**  
**Summer Holiday Homework- 2026**

**Class: V**

**Subject: English**

---

1. Make a comical strip on the story **Monday Morning Blues** (Use chart paper).
2. Write a ten-line story about **My Best Summer Day** ( Use and underline twenty nouns: blue for proper nouns, pink for collective nouns, purple for common nouns and black for abstract nouns.
3. Find out ten idiomatic expressions and draw relevant emoji beside them. (
  - i.g i. Cast a sly look - 😏
  - ii. In a playful mood - 😜

DAV Public School, DVC MTPS, Bankura

Summer Holiday Homework 2026

Class: V

Subject: Hindi

1) दिए गए प्रश्नों से सही विकल्प चुनकर लिखिए-

a) वल्लभ भाई ने दसवीं कक्षा की परीक्षा कहाँ से उत्तीर्ण की?

(क) अहमदाबाद

(ग) मुंबई

(ख) नदियाड़

(घ) दिल्ली

b) वल्लभ भाई किस देश जाकर कानून की पढ़ाई करना चाहते थे?

(क) अमेरिका

(ग) इंग्लैंड

(ख) जापान

(घ) फ्रांस

c) गांधी जी ने किसानों पर हो रहे अत्याचार का विरोध किस प्रकार किया?

(क) असहयोग आंदोलन द्वारा

(ग) स्वदेशी आंदोलन द्वारा

(ख) भारत छोड़ो आंदोलन द्वारा

(घ) सत्याग्रह द्वारा

d) सूरज के आने पर बीज क्या करेंगे?

(क) छिप जाएँगे



(ग) हड़बड़ करते भागेंगे

(ख) नाचेंगे

(घ) सूख जाएँगे

2) निम्नलिखित शब्दों के सही संबंध वाले विकल्प लिखिए छाँटकर :-

i) खग : पंछी :: चक्षु : ?

(क) पादप

(ग) ज़मीन

(ख) भवन

(घ) नेत्र



ii) यमुना : व्यक्तिवाचक :: लौह पुरुष : ?

(क) जातिवाचक

(ग) भाववाचक

(ख) व्यक्तिवाचक

(घ) इनमें से कोई नहीं

3) निम्नलिखित प्रश्नों के उचित विकल्प चुनकर लिखिए-

i) दिए गए शब्दों में से 'शुष्क' शब्द का विलोम शब्द छाँटकर लिखिए-

(क) सूखा

(ख) धूप

(ग) नम

(घ) पुरानी

ii) 'एक माह में होने वाला' वाक्यांश के लिए एक शब्द है-

क) मासिक (ख) साप्ताहिक (ग) वार्षिक (घ) दैनिक

4) निम्नलिखित शब्दों में 'वल्लभ भाई' के लिए उचित विशेषण शब्द नहीं है।

(क) आज्ञाकारी (ख) साहसी (ग) परिश्रमी (घ) हिंसावादी

5) निम्नलिखित शब्दों में उचित स्थान पर अनुस्वार या चंद्रबिंदु का प्रयोग कीजिए-

(क) सग्राम (ख) प्रधानमन्त्री (ग) आसू (घ) सबध

6) कहानी के अंत में होजा ने वज़ीर बनने से क्यों मना कर दिया? आप होजा की जगह होते तो क्या करते?

7) टिकट में नाम के कारण उत्पन्न हुई परिस्थिति को वल्लभ भाई ने गुस्सा न करते हुए समझदारी से संभाला और टिकट अपने बड़े भाई को दे दिया। अध्याय 'लौह पुरुष' के आधार पर लिखिए कि इस घटना से आप उनके स्वभाव के कौन-कौन से गुण सीख सकते हैं?

8) गतिविधि (Activity)

- I) किन्हीं चार स्वतंत्रता सेनानियों के चित्र चिपकाकर या बनाकर साथ ही उनके द्वारा दिए गए नारे को लिखिए। (स्क्रेप बुक में करेंगे)
- II) पेड़ों से होने वाले फायदों को वेब चार्ट के माध्यम से दिखाएँ। (स्क्रेप बुक में करेंगे)



**DAV Public School, DVC MTPS, Bankura**  
**Summer Holiday Homework 2026**

**Class: V**

**Subject: Bengali**

**1. নিচের অনুচ্ছেদটি পড়ে সঠিক উত্তরটি বেছে নিয়ে লেখো।**

হরিদ্বার থেকে লছমনঝুলা হয়ে প্রথম চারদিন হাটবার পর যে ছোটো পাহাড়ি শহর পাওয়া যায়, তার নাম 'দেবপ্রয়াগ'। বছরে বছরে কত যাত্রী এই পথ ধরে বদ্রীনাথ দর্শন করতে যায়। হিমালয় পর্বত শোভা ও সৌন্দর্যের লীলাভূমি। পাহাড়গুলি ঘন সবুজ, জঙ্গলময়। কোথাও দেখা যায়, দু'মাইল কি তিন মাইল দূরে মাথার ওপর ছোট্ট একখানি পাহাড়ি গ্রাম। দেবপ্রয়াগ থেকে চব্বিশ মাইল পথ গিয়ে রুদ্রপ্রয়াগ। এও একটি ছোট্ট শহর। এই রুদ্রপ্রয়াগে পথটি দুইভাগে বিভক্ত হয়েছে। একটি পথ গেছে সোজা কেদারনাথ পাহাড়ের দিকে, অন্য পথটি গেছে কর্ণপ্রয়াগ ও চামোলি হয়ে বদ্রীনাথের দিকে। আমরা চললাম কেদারনাথের দিকে। এই পথ অতি কঠিন ও দুরারোহ। শক্তির পরীক্ষা শুধু নয়; শক্তি, সাহস, ধৈর্য ও দুঃখের পরীক্ষা।



ক) হরিদ্বার থেকে চারদিন হাটবার পর যে ছোটো পাহাড়ি শহর পাওয়া যায় তার নাম -

- i) রুদ্রপ্রয়াগ                      ii) দেবপ্রয়াগ                      iii) কর্ণপ্রয়াগ                      iv) সোনপ্রয়াগ

খ) হিমালয় পর্বতের পাহাড়গুলি -

- i) ঘন সবুজ জঙ্গলময়                      ii) পাথরের                      iii) শুকনো                      iv) বরফাবৃত

গ) দেবপ্রয়াগ থেকে রুদ্রপ্রয়াগের দূরত্ব-

- i) ১৪ মাইল                      ii) ৪০ মাইল                      iii) ৩৪ মাইল                      iv) ২৪ মাইল

ঘ) রুদ্রপ্রয়াগ থেকে পথটি \_\_\_\_\_ ভাগে ভাগ হয়েছে।

- i) দুই                      ii) তিন                      iii) চার                      iv) পাঁচ

ঙ) 'ধৈর্য' শব্দটির বিপরীত শব্দটি হল-

- i) ধৈর্যবান                      ii) ধৈর্যশীল                      iii) অধৈর্য                      iv) ধৈর্যময়

**2. নিচের প্রশ্নগুলির উত্তর দাও:**

ক) 'ভবচন্দ্র রাজা ও গবচন্দ্র মন্ত্রী' গল্পটি পড়ে তুমি কী শিক্ষা পেলে?

খ) শিশু কবিতা অনুসারে শিশুদের দুটি চারিত্রিক বৈশিষ্ট্য লেখো।




- গ) কুসংস্কার কী ? তোমার চারপাশে প্রচলিত কুসংস্কার গুলি দূর করার জন্য তুমি কী কী পদক্ষেপ গ্রহণ করবে ?
- ঘ) বাংলা শব্দ ভান্ডারে এমন অনেক শব্দ আছে যাদের অর্থ ও বানান আলাদা, কিন্তু উচ্চারণ একই রকম বা প্রায় একই রকম। এই জাতীয় শব্দকে কী নামে অভিহিত করা হয়? এই জাতীয় একজোড়া শব্দের উদাহরণ দাও।
- ঙ) ‘এটা অবশ্য হস্তী; না খাইয়া রোগা হইয়াছে’। বক্তা কে? এর থেকে বক্তার বুদ্ধির কী পরিচয় পাওয়া যায়?

### 3. প্রকল্প

ক) যেকোনো পাঁচ জোড়া সমোচ্চারিত ভিন্নার্থক শব্দের ছবি এঁকে সমোচ্চারিত ভিন্নার্থক শব্দজোড়াটির নাম লিখে তার ভিন্ন অর্থ লিখতে হবে। (সক্রিয়তা ভিত্তিক কর্মটি Scrap Book এ করতে হবে।)

খ) গরমের ছুটিতে বাড়িতে থাকাকালীন অবস্থায় তুমি এমন কোনো কাজ করেছ, যার জন্য তোমার বাবা-মা আনন্দিত ও গর্বিত হয়েছেন। তোমার সেই অভিজ্ঞতার কথা জানিয়ে বন্ধুকে একটি পত্র লেখো। (পত্রটি পোস্ট কার্ড তৈরি করে লিখতে হবে। পোস্ট কার্ডটি Scrap Book এ লাগাতে হবে।)



# DAV PUBLIC SCHOOL ,DVC, MTPS, BANKURA

## Summer Holiday Home Work

Class : V

Subject : Sanskrit

### 1. उचित शब्देन रिक्तस्थानानि पूर्यन्तु -

(खगाः, सूर्यः, वानराः, बालाः)

क. आकाशे \_\_\_\_\_ उदितः ।

ख. \_\_\_\_\_ आकाशे उड्डयन्ति ।

ग. \_\_\_\_\_ क्रीडन्ति ।

घ. \_\_\_\_\_ वृक्षेषु कूर्दन्ति ।

### 2. शब्दार्थम् लिखन्तु-

क. अस्ति = \_\_\_\_\_ ।

ख. अत्र = \_\_\_\_\_ ।

ग. मधुरा = \_\_\_\_\_ ।

घ. अपि = \_\_\_\_\_ ।

ङ. एषा = \_\_\_\_\_ ।

### 3. नामानि लिखत-



\_\_\_\_\_

\_\_\_\_\_



\_\_\_\_\_

\_\_\_\_\_

### 4. 'षट्' बनवासिनः पशुनाम् नामानि लिखत -

\_\_\_\_\_

\_\_\_\_\_

\_\_\_\_\_

### 5. प्रश्नानाम् उत्तराणि लिखत 'आम्' अथवा 'न' -

क. किम् सूर्यः प्रभातवेलायाम् उदितः भवति? \_\_\_\_\_

ख. किम् प्रातः वानराः अपि प्रसन्नाः भवति? \_\_\_\_\_

ग. किम् बालाः उद्यानेषु क्रीडन्ति? \_\_\_\_\_

घ. किम् वानराः आकाशे भ्रमन्ति? \_\_\_\_\_

ङ. किम् प्रभातवेला सुखदायिनी अस्ति ? \_\_\_\_\_

6. शब्दार्थम् लिखन्तु-

I. अनेके = \_\_\_\_\_ ।

II. कुर्वन्ति = \_\_\_\_\_ ।

III. धावति = \_\_\_\_\_ ।

IV. चलति = \_\_\_\_\_ ।

7. रिक्तस्थानानि पूरयन्तु -

1. क \_\_\_\_\_ ग \_\_\_\_\_ ङ

2. \_\_\_\_\_ थ \_\_\_\_\_ ध \_\_\_\_\_

3. प \_\_\_\_\_ ब \_\_\_\_\_ म

4. श \_\_\_\_\_ स \_\_\_\_\_

5. आ \_\_\_\_\_ ई \_\_\_\_\_ ऊ

8. उत्तराणि लिखन्तु-

क. लेखकः किम् करोति?

\_\_\_\_\_ लिखति ।

ख. महिला किम् करोति?

\_\_\_\_\_ पचति ।

ग. एतत् किम् अस्ति ?

एतत् \_\_\_\_\_ अस्ति ।

घ. एषः कः अस्ति ?

\_\_\_\_\_ अध्यापकः अस्ति ।

ङ. सैनिकः किम् करोति?

\_\_\_\_\_ देशम् रक्षति ।

9. पञ्च जलजीवानाम् नामानि लिखन्तु -

I. \_\_\_\_\_ II. \_\_\_\_\_

III. \_\_\_\_\_ IV. \_\_\_\_\_

V. \_\_\_\_\_

10. रिक्तस्थानानि पूरयन्तु -

क. यः वृक्षे कूर्दति सः \_\_\_\_\_

ख. यः तीव्रं धावति सः \_\_\_\_\_

ग. यः वनराजः अस्ति सः \_\_\_\_\_

घ. यः भारं वहति सः \_\_\_\_\_

ङ. यः शनैः शनैः चलति सः \_\_\_\_\_

**D.A.V Public School, DVC, MTPS, Bankura**

**Summer Holiday Homework 2026**

Class- V

Subject- Mathematics

---

Solve the following questions:

1. During a book fair, a publisher sold **23,45,678** books in one year. Next year, they sold **12,34,567** more books. How many books were sold in the second year?

Ans:

2. A toy factory produced **78,45,230** toys in January and **65,12,480** toys in February. Find the total number of toys produced in both months.

Ans:

3. A company manufactured **8,75,430** mobile phones. Out of these, **2,15,320** phones were exported to other countries. How many phones remained in the country?

Ans:

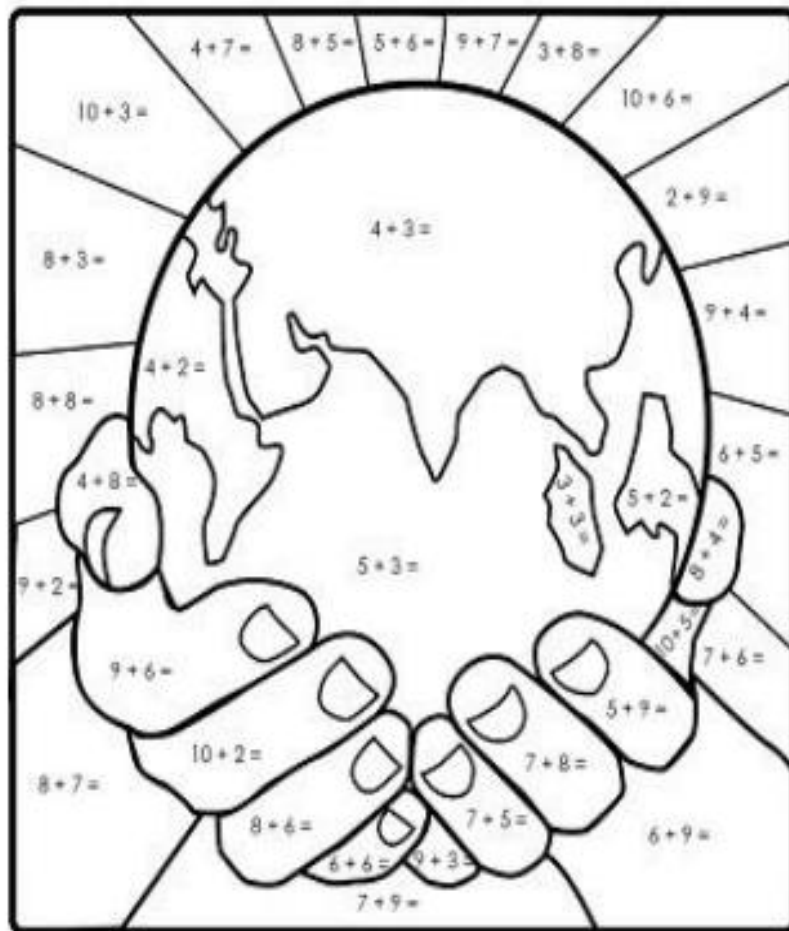
4. A farmer harvested **56,789** kg of rice from one field and **45,678** kg from another field. How much rice did he harvest in total?

Ans:

5. A railway station sold **18,45,678** tickets in April and **20,54,322** tickets in May. How many tickets were sold altogether in these two months?

Ans:

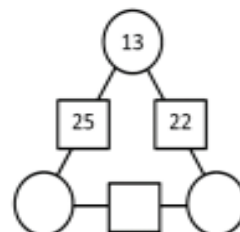
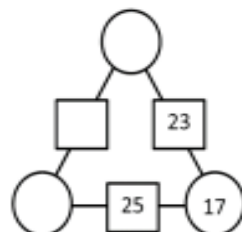
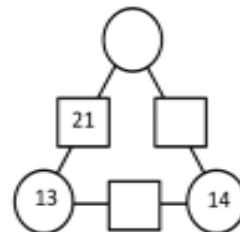
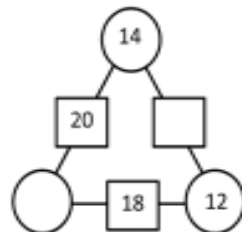
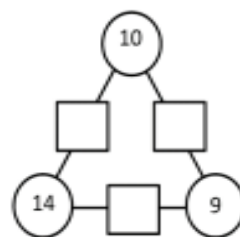
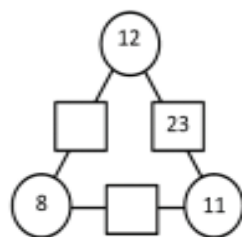
6. Write the answer and then colour them according to key given



- Orange 11
- Yellow 16, 13
- Beige 15, 14, 12

- Blue 8
- Green 6, 7

7. Find the missing term :



8. Heavy floods affected several villages in a state. Different schools, companies, and organizations came forward to donate money for flood relief.



The amount collected by different groups is given below:

<b>Organization</b>	<b>Amount Donated</b>
Sunrise School	Rs 12,45,780
Green Valley School	Rs 9,87,650
Helping Hands Club	Rs 15,34,920
Bright Future Company	Rs 8,76,540

The government spent **Rs 25,00,000** immediately on food, medicines, and temporary shelters.

Answer the following questions based on the case study:

### Questions

- How much money was collected altogether by all the organizations?
- Which organization donated the highest amount and how much?
- Find the difference between the donation of Helping Hands Club and Green Valley School.
- After spending Rs 25,00,000 on relief work, how much money was left?
- If the remaining amount is equally distributed among 5 villages, how much money will each village receive?
- Arrange the donated amounts in ascending order.
- If another company donates Rs 4,50,000 more, what will be the new total amount collected?

### Activity :

**Make a Place Value Chart of Indian Numeral System And International Numeral System in a single whole chart paper.**

**DAV Public School, D.V.C. M.T.P.S. Bankura**  
**Summer Holiday Home work. 2026**

**CLASS-V**

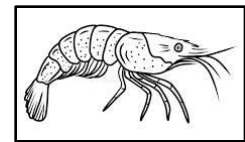
**SUBJECT-SCIENCE**

❖ **Activity: Water Wonder**

- Take four glasses of water. Glasses should be transparent.
- Add the following materials to different glasses: mustard oil, ink, sand, salt
- Observe the changes and take pictures of each glass and paste that to white side page of lab copy
- Write down the following things in line pages of your lab activity copy: Aim, Materials required, observation, conclusion.

❖ **Answer the following as per instruction:**

- 1 Draw the phenomenon that brings back water to the surface of earth. Name the two other states water. Guess the source of heat that converts water into its vapour form from seas and oceans.
- 2 Identify the animal shown in the picture. Name its habitat. Write any two importance of water in animal's life.
- 3 A brown-coloured liquid **X**, when mixed with water, dissolves completely. Then the mixture formed, is labelled as **Y**. **X** is obtained from an insect. Another brown-coloured liquid **Z**, when mixed with water, it floats on water and it is a plant product.  
Identify **X**, **Y** and **Z**. Name a liquid that also have a similar property as that of **Z** but sinks in water.
- 4 Find out who is correct and why?
  - a) Rita: Salamander is a reptile but frog is an amphibian.  
Rima: Salamander and frog both are amphibian.
  - b) Raju: At winter clothes dry easily.  
Jitu: At summer clothes dry faster.



[**Note: Write all the question-answers in line pages of lab activity copy and any diagram will be done in white pages of lab activity copy ]**

**DAV PUBLIC SCHOOL, DVC, MTPS, BANKURA**

**Summer Holiday Homework 2026**

**Class: V**

**Subject : Social Science**

1. Read the passage carefully and write the answers of the questions given below in an A4 sheet.

Shyam was a skilled blacksmith in a small village in Uttar Pradesh. One year, his village was hit by a severe drought, and the farmers lost all their crops. Since the farmers had no money, they could not buy tools from Shyam. With no work left in the village, Shyam was forced to migrate to Lucknow to earn money to feed his family of five. In the city, he had to live without basic amenities like a proper shelter or safe drinking water, and he worked long hours at construction sites. Despite these hardships, Shyam sends money home every month so his children can continue their education.

**Questions**

- i. Name the “Natural Disaster” that led to Shyam’s migration.
  - ii. Highlight the effects of the disaster on his occupation as a blacksmith.
  - iii. Shyam lives in very difficult conditions in the city but still sends money home for his children’s education. State the quality reflected by Shyam as a parent.
  - iv. Mention two basic facilities that Shyam is missing in the city.
2. Prepare a Web Chart showing your responsibility as a Neighbour on an A4 sheet. (5 points)
  3. In a Scrap Book, prepare 4 pages about your state on the topic “Culture and Customs of My State”. You must include languages spoken, dresses, famous food items, festivals, places of tourist attractions, etc. Paste or draw pictures making the work innovative and colourful.
  4. On a political map of India, locate, label and colour the following.
    - i. State where you can find houseboats.
    - ii. The state whose maximum portion is covered by the desert area.
    - iii. State where Bhimbetka caves are located
    - iv. One state situated along the Bay of Bengal
    - v. State experiencing a very cold climatePreparation of the index for the map is compulsory.