

D.A.V. PUBLIC SCHOOL, DVC MTPS
HOLIDAY HOMEWORK
SESSION:2024-25

CLASS:VI

SUBJECT: ENGLISH

1. Answer the following questions:

- a. Was the white elephant rightly justified in helping the forester? Give your reason.
- b. Why did the author use the colour “white” for the central character i.e, the elephant in the story?
- c. Write the role of the officer in Daddy’s life.

2. Replace the adverb phrase with an adverb:

- a. He will report at the hospital before long.
- b. He paints like a born artist.

3. Change the degree:

- a. Sheela is as brave as Reema. (Change into comparative)
- b. China has a higher population than India. (Change into positive)

4. Read the following telephonic conversation between Rohit and Vishal. Vishal is going for his badminton coaching and hence leaves a message for Manav. Draft his message in not more than 50 words.

Rohit : Hello! Could I speak to Manav?

Vishal : He is not at home. May I know who is on the line?

Rohit : I am Rohit, your neighbour.

Vishal : Rohit, I’m Manav’s elder brother, Vishal. How are you?

Rohit : I am fine. Could you take my message for Manav?

Vishal : Yes, sure.

Rohit : Tell him that I need my Social Science book which he took yesterday as soon as possible because I have to make a school project. Also tell him to guide me for the project when he comes back.

Vishal : Okay. I will convey your message.

Rohit : Thank you. Bye.

5. Prepare a chart and paste pictures of your grandparents or other relatives with whom you’re closely related with and write the importance of those persons in your life.

D.A.V. PUBLIC SCHOOL, DVC MTPS
HOLIDAY HOMEWORK
SESSION:2024-25

CLASS:VI

SUBJECT: BENGALI

১। সঠিক উত্তরটি বেছে লেখো-

ক) মন্তব্য: সন্ধ্যাক্ষরগুলি উচ্চারণে একাধিক স্বরধ্বনির যোগ থাকে।

যুক্তি: ঐ ও ঔ বর্ণের মধ্যে দুটি স্বরধ্বনিকে পৃথক পৃথকভাবে পাওয়া যায়।

i) মন্তব্য ঠিক যুক্তি ভুল

ii) মন্তব্য ও যুক্তি দুটিই ঠিক

iii) মন্তব্য ও যুক্তি দুটিই ভুল।

খ) মন্তব্য: বাংলায় সানুনাসিক শব্দের উচ্চারণ সম্বন্ধে সতর্ক হওয়া প্রয়োজন।

যুক্তি: সানুনাসিকত্বের উপরে অর্থের পার্থক্য নির্ভর করে।

i) যুক্তি ও মন্তব্য উভয়েই ঠিক।

ii) যুক্তি ঠিক কিন্তু মন্তব্য ভুল।

iii) যুক্তি ও মন্তব্য কোনোটিই ঠিক নয়।

গ) 'র' যদি ব্যঞ্জনবর্ণের পরে যুক্ত হয় তবে ____ হয়।

i) ব-ফলা হয় ii) র-ফলা iii) য-ফলা

ঘ) শব্দের মাঝে 'ঙ' থাকলে তার উচ্চারণ ____ মত হয়।

i) 'ঞ' এর মত হয় ii) 'ঙ্গ' এর মত হয় iii) 'ণ' এর মত হয়

ঙ) প্রিয় মুখ্যের হাতে ছিল তোয়ালে বাঁধা -

i) গয়নার বাক্স ii) ঔষধের বাক্স iii) বইয়ের বাক্স

চ) কোথায় ছাগলকে ফ্যান খাওয়ানো হয়েছিল?

i) বামুনপাড়ায় ii) দুলে পাড়ায় iii) চাষা পাড়ায়

ছ) দ্বিজ শান্তিপন বাস করতেন-

i) মগধে ii) অবন্তী নগরে iii) কাশীতে

জ) কোথায় সব জল বয়ে যাচ্ছিল?

i) গম ক্ষেতে ii) আখ ক্ষেতে iii) ধান ক্ষেতে

ঝ) গৌরাক্ষের ভালো নাম রাখা হলো-

i) বিশ্বস্তর ii) বিশ্বরূপ iii) বিশ্বনাথ

ঞ) চৈতন্যদেবের বাল্যকাল ও যৌবনকাল কেটেছিল _____ রাজত্বকালে।

i) লক্ষণ সেনের ii) রাজা গনেশের iii) হোসেন শাহের

২. একটি চার্ট পেপারে তোমার ভালো লাগা যে কোনো পাঁচজন বাংলা সাহিত্যিকের ছবিসহ নামের তালিকা নির্মাণ করে তাদের একটি করে সাহিত্য কীর্তির নাম লেখো।

D.A.V. PUBLIC SCHOOL, DVC MTPS
HOLIDAY HOMEWORK
SESSION:2024-25

CLASS:VI

SUBJECT: HINDI

1 प्रस्तुत कार्ड-चित्र के आधार पर उससे संबंधित प्रश्नों को पढ़कर विशिष्ट जानकारी लिखिए -



- क) प्रस्तुत कार्ड किस कार्यक्रम से संबंधित है ?
- ख) यह कार्यक्रम कब और कहाँ प्रसारित होने वाला है?
- ग) इस कार्यक्रम के मेज़बान कौन हैं?
- घ) मुख्य अतिथि का परिचय लिखिए।

2 निम्नलिखित प्रश्नों में दिए गए उचित संबंध को ज्ञात कीजिए:-

- i) व्यक्तिवाचक संज्ञा : भारत :: जातिवाचक संज्ञा : ?
क) सागर ख) हिमालय ग) ईमानदारी घ) गंगा
- ii) च्च : बच्चा :: स्त : ?
क) सच्चा ख) मक्खन ग) अच्छा घ) पुस्तकालय
- iii) कथन (अ) - निम्नलिखित कथनों को पढ़कर सही विकल्प का चयन कीजिए-
अभिकथन - ' गर्मी की वजह से मुझे थकावट हो रही है।' वाक्य में रेखांकित शब्द भाववाचक संज्ञा का उदाहरण है ।

तर्क - किसी भी प्रकार के भाव की सूचना देने वाले शब्द भाववाचक संज्ञा कहलाते हैं ।

विकल्प

- क) अभिकथन सही है, किन्तु तर्क गलत है ।
ख) अभिकथन गलत है, किन्तु तर्क सही है ।

ग) अभिकथन और तर्क दोनों सही हैं, क्योंकि तर्क अभिकथन की सही व्याख्या करता है ।

घ) अभिकथन और तर्क दोनों सही हैं, परंतु तर्क अभिकथन की सही व्याख्या नहीं करता है ।

iv) **अभिकथन - 'गाय' का स्त्रीलिंग शब्द 'बैल' है ।**

तर्क - स्त्रीलिंग शब्द से स्त्री जाति का बोध होता है ।

विकल्प

क) अभिकथन सही है, किन्तु तर्क गलत है ।

ख) अभिकथन गलत है, किन्तु तर्क सही है ।

ग) अभिकथन और तर्क दोनों सही हैं, क्योंकि तर्क अभिकथन की सही व्याख्या करता है।

घ) अभिकथन और तर्क दोनों सही हैं, परंतु तर्क अभिकथन की सही व्याख्या नहीं करता है ।



v) **'दुर्घटना'** शब्द का शुद्ध रूप चुनिए-

क) दुर्घटना ख) दुर्घटना ग)दूर्घटना घ) दुर्घटना

vi) **निम्नलिखित** शब्दों में कौन-सा शब्द पुल्लिंग नहीं है?

क) सम्राट ख) अभिनेत्री ग) गुणवान घ) विद्वान

vii) **'दिनांक'** शब्द में किस पाँचवें वर्ण के स्थान पर अनुस्वार का प्रयोग हुआ है?

क) म ख) ज ग) ङ घ) न

3 निम्नलिखित शब्दों में उचित स्थान पर अनुस्वार (ं) अथवा अनुनासिक (ँ) लगाकर लिखिए:-

क) पहुच ख) कुआ ग) वायुमडल

घ) अधेरा ङ) सुदर च) सयोग

4 निम्नलिखित प्रश्नों के उत्तर लिखिए -

क) ओलों के बनने और गिरने के बारे में दादाजी ने क्या बताया?

ख) हमें जल का संरक्षण कैसे करना चाहिए? कोई तीन उपायों को लिखिए ।

5 निम्नलिखित विषय पर पत्र लिखिए ।

क) विद्यालय का मासिक शुल्क माफ़ कराने हेतु प्राचार्य को पत्र लिखिए।

6 **परियोजना कार्य**

संज्ञा के भेद पर एक चार्ट परियोजना बनाइए ।

D.A.V. PUBLIC SCHOOL, DVC MTPS
HOLIDAY HOMEWORK
SESSION:2024-25

CLASS:VI

SUBJECT: SANSKRIT

1. उचित शब्दार्थं चित्वा लिखन्तु-
(विजयः, अग्रे-अग्रे, पृथ्वी, युद्धे, देहि)
क. पुरः-पुरः
ख. प्रयच्छ
ग. जयः
घ. भूमिः
ङ. रणे
2. वर्ण-योजनं कुर्वन्तु-
क. अ + त् + र् + अ
ख. क् + उ + त् + र् + अ
ग. स् + अ + द् + आ
घ. य् + अ + द् + इ
3. वर्णविन्यासं कुर्वन्तु-
I. भ्रमति
II. हर्षः
III. इक्षु
IV. छत्रम
4. पर्याय-पदं चित्वा लिखन्तु-
(नित्यं, पाठशाला, शोभनः, क्रीडाक्षेत्रे)
I. विद्यालयः
II. सुन्दरः
III. प्रतिदिनं
IV. क्रीडांगणे

5. उतराणि एकपदेन लिखन्तु-

- I. विद्यालये कानि सुन्दराणि सन्ति?
- II. विद्यालये अहं कैः सह क्रीडामि?
- III. वयं कुत्र क्रीडामः धावमःच?
- IV. वयं केषां सम्मानं कुर्मः?

6. उत्तराणि पूर्णवाक्येन लिखन्तु-

- I. विद्यालये अनेकानि कानि सन्ति?
- II. वयं मिलित्वा किं कुर्मः?

7. मंजूषायां प्रदत्त-पदैः रिक्तस्थानानि पूरयन्तु-

(गीतानि, विद्यालय, पाठं, लेखम)

- I. अहं प्रतिदिन _____ गच्छामि।
- II. विद्यालये प्रतिदिन _____ पठामि।
- III. प्रतिदिन _____ अपि लिखामि।
- IV. वयं मिलित्वा _____ गायामः।

8. सर्वनाम पदैः रिक्त स्थानानि पूरयन्तु-

पुलिंगे सः छात्रः _____ छात्रौ _____ छात्राः
स्त्रीलिंगे सा छात्रा _____ छात्रे _____ छात्राः
नपुंसकलिंगे तत् फलं _____ फले _____ फलानि

9. प्रदत्त-पदैः रिक्तस्थानानि पूरयन्तु-

(काकः, वार्तालापं, वने, दूरं)

- I. चत्वारि मित्राणि मिलित्वा _____ वसन्ति।
- II. हरिणः _____ गच्छति ।
- III. ते परस्परं _____ कुर्वन्ति ।
- IV. _____ हरिणं पश्यति।

10. विपरीतं पदं लिखन्तु-

क. दूरम्

ख. सायंकालः

ग. प्रसन्नाः

घ. सुखेन

11. Prepare in a chart paper for project work.

‘अस्मद्’ सर्वनाम रूपाणि लिखन्तु-

विभक्तिः	एकवचनम्	द्विवचनम्	बहुवचनम्
प्रथमा	_____	_____	_____
द्वितीया	_____	_____	_____
तृतीया	_____	_____	_____
चतुर्थी	_____	_____	_____
पंचमी	_____	_____	_____
षष्ठी	_____	_____	_____
सप्तमी	_____	_____	_____

‘युष्मद्’ सर्वनाम रूपाणि लिखन्तु-

विभक्तिः	एकवचनं	द्विवचनम्	बहुवचनम्
प्रथमा	_____	_____	_____
द्वितीया	_____	_____	_____
तृतीया	_____	_____	_____
चतुर्थी	_____	_____	_____
पंचमी	_____	_____	_____
षष्ठी	_____	_____	_____
सप्तमी	_____	_____	_____

D.A.V. PUBLIC SCHOOL, DVC MTPS
HOLIDAY HOMEWORK
SESSION:2024-25

CLASS:VI

SUBJECT: MATHEMATICS

1. Write the greatest 3-digit number using the digits 0, 5, 9 and also write the number in Roman Numerals.
2. Write the predecessor of CMXLV in Roman Numerals.
3. Using distributive property find the product of 999×399 .
4. Find the largest 4-digit number which is exactly divisible by 15.
5. Estimate: $2555 - 550 - 850$.
6. Arrange the following in ascending order: XCV, LXXXV, XCI, LVII, XCIV.
7. Complete the series: 3, 4, 7, 11, 18, 29, 47, ____, ____.
8. Divide and check your answer: $8721 \div 97$.
9. Round off the given number to the nearest crore 5,55,55,555.
10. Simplify the numerical expression: $270 - (6 \times 15 \div 3)$.
11. In a factory a machine produces 75,693 toys in 8 hours. How many toys produce in 16 days?
12. 75,75,863 sweets were distributed among 352 students of a school. How many sweets will each student get if every student gets an equal number of sweets? How many sweets will be left?
13. A number was divided by 97; the quotient was 286 and remainder 14. Find the number.
14. In a library there are 1756 books. Out of them 536 are science books, 428 are mathematics books and others are comics.
 - a. How many comics books are in the library?
 - b. Write the number of comics books in Roman numerals.
 - c. If the library buys 495 mathematics books. Find the total number of mathematics book in library and also write the number in Roman numerals.
15. Find the value of the numerical expression:
 $25.5 - (4.5 \div 0.5) + (3.5 \times 2) - (47 \div 2)$

D.A.V. PUBLIC SCHOOL, DVC MTPS
HOLIDAY HOMEWORK
SESSION:2024-25

CLASS:VI

SUBJECT: SCIENCE

1. Order of energy flow in an ecosystem is

- a) Sunlight → Herbivores → Producers → Carnivores
- b) Sunlight → Producers → Carnivores → Herbivores
- c) Sunlight → Herbivores → Carnivores → Producers
- d) Sunlight → Producers → Herbivores → Carnivores

2. Rahul noticed his potted plant was not looking healthy. He put three earthworms into the pot. After a few days he noticed that his plant was looking healthier. What could be the possible reason for this change?

- a) The earthworms helped the plant to take in water.
- b) The earthworms ate up the pests in the soil.
- c) The earthworms allowed the plants to make food faster.
- d) The earthworms increased the air and nutrient contents of the soil.

3. The microorganisms comprises of

- a) bacteria
- b) fungi
- c) both (A) and (B)
- d) green plants

4. Assertion (A): Decomposers help in recycling of nutrients.

Reason (R): Decomposers breakdown the dead and decaying plants and animals into minerals.

- a) Both A and R are true and R is correct explanation of A
- b) Both A and R are true and R is not the correct explanation of A
- c) A is true and R is false
- d) A is false and R is true.

5. Assertion (A): Deficiency of calcium causes night blindness.

Reason (R): In our diet milk and milk products are major source of calcium.

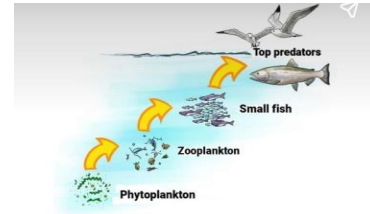
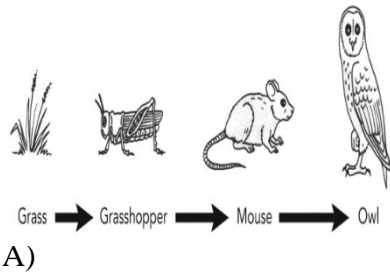
- a) Both A and R are true and R is correct explanation of A
- b) Both A and R are true and R is not the correct explanation of A
- c) A is true and R is false
- d) A is false and R is true.

6. Assertion (A): Buffaloes cool themselves by dipping in water in summer

Reason (R): Buffaloes do not have efficient sweat glands

- a) Both A and R are true and R is correct explanation of A
- b) Both A and R are true and R is not the correct explanation of A
- c) A is true and R is false
- d) A is false and R is true.

7. Identify the nature of these given food chains as aquatic and terrestrial.



8. Which deficiency disease is caused by the lack of Vitamin C in the list?

- a) Beriberi
- b) Scurvy
- c) Anaemia
- d) Rickets

9. Device to measure temperature

- a) Thermometer
- b) Stethoscope
- c) Computer
- d) None of the above

10. Egg is the rich source of

- a) Protein
- b) Carbohydrates
- c) Iron
- d) None of the above

11. person may be getting enough food to eat, but sometimes the food may not contain a particular nutrient. If this continues over a long period of time, the person may suffer from its deficiency.

If a person does not get enough proteins in his/her food for a long time, he/she is likely to have stunted growth, swelling of face, discolouration of hair, skin diseases and diarrhoea.

If the diet is deficient in both carbohydrates and proteins for a long period of time, the growth may stop completely. Such a person becomes very lean and thin and so weak that he/she may not even be able to move.

I) Name the disease which is caused due to deficiency of proteins.

- a) Kwashiorkor
- b) Marasmus
- c) Lung problem
- d) None of the above.

II) Name the disease which is caused due to deficiency of carbohydrates, fats, protein.

- a) Kwashiorkor
- b) Marasmus
- c) Lung problem
- d) None of the above.


III) Balanced diet contains

- a) Only water and mineral
- b) All nutrients in correct proportions
- c) Roughage and dietary fibres
- d) Both a and c

IV) Which is not the symptom of protein deficiency?

- a) Skin diseases
- b) Lean
- c) Stunted growth
- d) Bleeding gums

12. Observe the diagram carefully and answer the following questions



- a) Identify the test for the given sample.
- b) Mention the food component which is detected through the above experiment

13. Take a small quantity of a food item. Wrap it in a piece of paper and crush it. Take care that the paper does not tear. Now, straighten the paper and observe it carefully.

- a) Does it have an oily patch?
- b) Hold the paper against light. Are you able to see the light faintly, through this patch?
- c) Mention the presence of food component through the above experiment.
- d) State the composition of fats.

Activity H/W: Make a poster on "Harvest water to harvest life". Prepare the poster in A4 size paper

D.A.V. PUBLIC SCHOOL, DVC MTPS
HOLIDAY HOMEWORK
SESSION:2024-25

CLASS:VI

SUBJECT: SOCIAL SCIENCE

Q.1 Choose and write the correct options: -

a) The earliest Map was made in 2300 B.C. in which country? _____

i) Mesopotamia (Iraq). ii) Greece. iii) Persia (Iran). Iv) Armenia.

b) The first human being to set foot on the Moon was _____.

i) Neil Armstrong ii) Yuri Gagarin iii) Kalpana Chawla iv) Sunita Williams

Q.2 In this question given below, there are two statements marked as Assertion (A) and Reason (R).

Assertion (A): The Red Planet Mars is a cold desert.

Reason (R): It's atmosphere is too thin for liquid water to exist for long on the surface.

i)Both (A) and (R) are true and (R) is the correct explanation of (A).

ii) Both (A) and (R) are true but (R) is not the correct explanation of (A).

iii)(A) is true but (R) is false.

iv)(A) is false but (R) is true.

Q.3 Match the following and choose the correct option.

i)	Pongal.	A	Punjab.
ii)	Green Revolution.	B	Tamil Nadu.
iii)	Bal Gangadhar Tilak.	C	Rajasthan.
iv)	Ghoomer.	D	Maharashtra.

a) i) – A, ii) – B, iii) – C, iv) – D.

b) i) – B, ii) – A, iii) – D, iv) – C.

c) i) – D, ii) – A, iii) – C, iv) – B.

d) i) – B, ii) – C, iii) – A, iv) – D.

Q. 4 Assertion (A): Swami Dayanand Saraswati was a great social reformer.

Reason (R): He was totally against the caste system and strongly advocated the cause of education for all.

i. Both (A) and (R) are true and (R) is the correct explanation of (A).

ii)Both (A) and (R) are true but (R) is not the correct explanation of (A).

iii) (A) is true but (R) is false.

iv. (A) is false but (R) is true.

Q.5 Mention the name of the place where the archaeologists have found pit houses.

Q.6 Identify the picture and name the place to which it belongs.



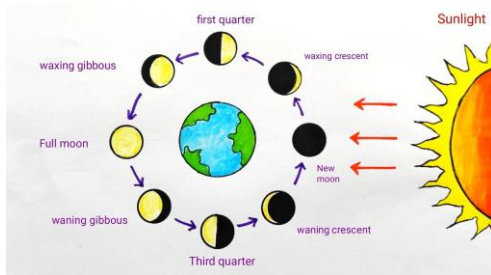
The use of electricity has revolutionised the rural life. Television, Radio, Telephone and different types of home appliances are common in rural areas. New agricultural implements, fertilizers and finances are easily available. These have helped the farmers to usher Green Revolution in the country. Green Revolution began in India in the mid 1960's to increase production of crops like wheat, rice, etc. M.S. Swaminathan is known as "The Father of Green Revolution in India". Punjab was the first state to try the new crops. The life style of the rural population has been changed.

- i) Mention the factor, which has revolutionised the rural life in our country.
- ii) Who is known as "The Father of Green Revolution in India"?
- iii) Identify the first state to start new crops.

Q.8 a) Identify the names of two festivals and their respective states, through which the happiness of the farmers is expressed.

b) Mention three features which throw light on the diversity in India.

Q.9



'The position of the moon in relation to the sun changes every day' – Justify the statement with proper explanation.

Project Work: - Make a Project of Colourful Coins, belonging to the period of SamudraGupta with the help of clay. The Project should be beautiful and attractive.

MAP WORK: On the Outline Political Map of India, locate, label and colour the following places ---

- i) Two Cities in the Northern Plains.
 - ii) The Queen of Hill Stations.
 - iii) The birthplace of poet Kalidas.
 - iv) Chandoli.
 - v) The State from where the White Revolution had started.
-