

D.A.V. PUBLIC SCHOOL,
D.V.C., M.T.P.S.HOMEWORK
FOR SUMMER VACATION
SESSION 2024-25

CLASS-IV

SUBJECT-ENGLISH

1. Read the extracts and answer the following questions accordingly by choosing the correct options:

A. “Rahul was ashamed of himself and cried bitterly. Raj came to him and said ‘ Rahul, do not worry. This is just a class test. Start studying well and work hard from now onwards. If you do so, you will do much better in the term-end exams.’ Rahul thanked Raj. He worked hard. Raj helped Rahul in every way he could. When the term-end examination result was announced, everyone was surprised to see that he had not only topped in the class but beaten Raj as well . Raj was the first one to congratulate him.”

i. When was Rahul feeling ashamed?

- (a) After winning the race.
- (b) After securing less marks in exam.
- (c) After he apologised to Raj.
- (d) After his confession to the principal

ii. Which one is **not** the correct antonym of bitterly?

- (a) Gleefully.
- (b) Gladly.
- (c) Blissfully.
- (d) Harshly.

iii. Which traits you can find from the character of Raj in context of the above extract?

- (a) Compassionate and kind.
- (b) Envious and gullibility.
- (c) Courageous and ambitious.
- (d) Ethical and enthusiastic

iv. Why did Rahul work hard to get the better marks in exam?

- (a) To compete with his friend Raj.

- (b) To prove himself as a best son to his parents.
- (c) To keep the promise he made to the principal.
- (d) To get the chance to participate in the next round of competition.

B. “ I was located sleeping peacefully beside a fisher-woman, totally ignorant of the commotion I had caused. The mix-up, it appears, followed after the babies had given their bath. I am grateful to my uncle for noticing the hole, for I have often wondered what would have happened if nature had not ‘marked’ me out.”

i. What does the narrator express in this story?

- (a) His gratitude towards Nan kaka.
- (b) Expressing his luck for being marked out by nature.
- (c) Cursing the hospital's staff for being so irresponsible.
- (d) Expressing curiosity about the life of the other baby.

ii. Choose the appropriate image which refers to the autobiographical book of Sunil Gavaskar.



iii. She heard a commotion and calls for help. Which of the following word can replace the underlined word in the sentence?

- (a) pandemonium
- (b) stir
- (c) frantic
- (d) annoyance

iv. The keen observer was terrorized on his second visit to the nursing home as he detected -

- (a) That the infants were interchanged.
- (b) That there was no hole in the left ear lap.
- (c) That the infant was taking a nap beside a fisher-woman.
- (d) Option a, b and c are correct.

2. I) Write the opposite gender :

- (a) Heir-
- (b) Boar-

II) Fill in the blanks with appropriate collective nouns :

- (a) A_____of directors.
- (b) A_____of bread.

III) Encircle the possessive pronouns and underline the personal pronouns :

The book on the shelf is mine; I left it there earlier.

Is this laptop yours, or did you borrow it from someone?

3. You went to receive your uncle and aunt from the Bengaluru railway station. Write a diary entry to share your experience of the journey from home to the railway station.

4. Activity – Draw or paste the picture of your favourite game and write few lines about it. (Do it in chart paper).

SUBJECT: HINDI

1. वाक्यों छाँ -

i) सब शिमला गए थे।

ii)

2. _____ -

i)

ii)

3. _____ - बढाइए-

गिरगिट-> टमाटर -> _____ -> _____ -> _____ -> _____

4. _____ -

i) जो साथ पढता हो

ii)

5. _____ दो-दो -

i) चम्मच _____

ii) उल्लू _____

6. दादी माँ को जब चप्पलें छोटी हो गई तो दादी माँ ने सुप्यंदी को क्या करने के लिए कहा और सुप्यंदी ने क्या किया?

7. _____ - _____ ?

8. _____ घबराकर हम आगे बढ़ना छोड़ देंगे तो क्या होगा?

9. _____ - _____ के लिए दोबारा _____ लिए भेजते हैं ?

10. _____ ?

परियोजना कार्य

.1/4

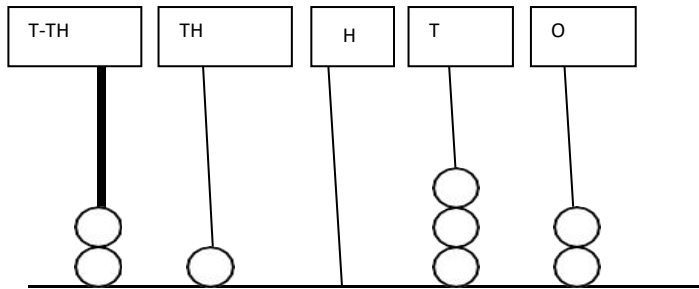
. परिचय लिखिए।

.

SUBJECT: MATHEMATICS

Chapter-1

Q1) What number does the bead show on the abacus?



Q2 Represent the number 35820 on the abacus. Q3. Write the number names for the following.

a. 39,005

b. 8,06,897

Q4. Write the numerals : Six lakhs Forty Seven thousand two

Q5. Write down the period and place of the underlined digit in each numeral.

Numeral	Period	Place
56, <u>7</u> 53		
<u>2</u> , 47, 765		

Q6. Fill in the blanks.

a. The numeral just before 10, 009 is _____.

b. The greatest 5 digit numeral is _____.

Chapter – 2

Chose the correct option.	
1.	$\underline{\hspace{2cm}} + 0 = 42,693$ e. 41,693 f. 42,963 g. 0 h. 43,693
2.	In subtraction the smaller number is called _____ e. Subtrahend f. Difference g. Addend h. Minuend
Fill in the blanks.	
3.	When we add 10 to 90,136 the digit at _____ increases by 1
4.	$10 + 1,00 + 10,100 = \underline{\hspace{2cm}}$
Answer the following questions.	
5.	Find the number which is 200 more than the predecessor of 600.
6.	Find how much more the greatest 5-digit number than smallest 4-digit number.
Short Answer Type Question-I	
7.	Arrange in column and find the sum: 6,23,568 and 42,74,587
8.	Arrange in column and find the difference: 23,38,156 and 1,07,895
9.	What must be subtracted from 5,25,873 to get 1,75,693
Short Answer Type Question-II	
10.	Simplify: $(47,489 + 2,65,468) - (5,092 + 28,469)$
11.	Find the difference between smallest 6- digit number and greatest 4-digit number.
Long Answer Type Questions.	
12.	Mr. Babu sells onions and potatoes. He sold 3,121 kg of potatoes and onions in the first week and 3,621 kg of potatoes and onions in the second week. If he ordered 8,050kg of potatoes and onions, how much onions and potatoes are remaining to be sold?
13.	By using the digits 1 ,4 ,7 ,9 form the greatest and smallest 7-digit number. Calculate the sum of the produced numbers.
14.	Mr. Roy spends Rs.6,800 on grocery, Rs.5,765 on rent and Rs.580 on other things each month. Find his savings if monthly salary is Rs.20,000.

Chapter – 3

Short answer type questions:

- 1) Multiply 431 by 132.
- 2) Find the product of 502 and 340.
- 3) Multiply 713 by 50.

Long answer type questions:

- 4) There are 350 chocolates in a packet. How many chocolates are there in 210 packets?
- 5) There are 1000 pages in a book. How many pages are there in 25 such books?

Activity:

Dear Students

Make a 2D

(on paper) or 3D (Model with waste material available at home) Place Value chart showing Periods, Places and Place Values.



SUBJECT: SCIENCE

1. Choose the correct option:

- a. Saliva is secreted from
- | | |
|--------------------|---------------|
| i) Salivary glands | ii) Pituitary |
| iii) Liver | iv) Pancreas |






- b. ← It helps a plant to
- | | |
|--------------------|-------------------|
| (i) absorb water | ii) prepare food |
| (iii) produce seed | iv) all of these. |
- c. Food is passed from the stomach to a long and coiled structure.

What does it call as?

- | | |
|----------------------|----------------------|
| i) Food pipe | (ii) Small intestine |
| iii) Large intestine | (iv) Rectum |

1. Select the given food and write their names in columns that make tooth happy or sad:

2. Fill in the blanks with appropriate words.

- i) A set of twenty temporary teeth is called _____.
- ii) _____ fixes the plant in soil.
- iii) The white outer covering of teeth is known as _____

3. Rewrite the following sentences correctly.


- i) Digestion of food begins in the large intestine.
- ii) Stem of a plant helps in soil conservation
- iii) Fibrous root is a single, long root with thin roots arising from it.

4. Give reasons for the following:

- i) Proper chewing of food is essential for digestion.
- ii) We should always wash fruits and vegetables before consuming.
- iii) Aerial roots are very much important for mangrove plants.

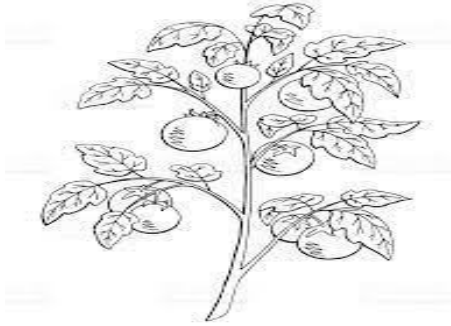
5. Study the given figure and answer the following questions.

- i) Which kind of root do you find in this picture?
- ii) Give one example of such kind of root.



6. Make a web chart to show various special roots and their functions.

7. Radha went to the garden along with her father. Her father wanted to teach her about the different types of roots. He showed two plants and described about the roots of those plant. Radha observed the following two plants. Now you help Radha to
- Identify these two following plants
 - Differentiate between roots of these two plants.
 - Draw the roots of the plants.




a)



b)

*** Project Work: Make a clay model of human digestive system on a card board (Size: 12"X 6")**

SUBJECT: SOCIAL SCIENCE

Question No	Question	Marks
1.	Choose the correct option:- Tilak is applied on – i) Forehead ii) Left cheek iii) Right cheek iv) Hand	1
2.	One of the following which is not a craft:- i) Weaving ii) Dusting Furniture iii) Pottery iv) Carving	1
3.	Cross the odd one:- iv) Love v) Affection vi) Respect vii) Residence	1
4.	Fill in the blanks:- ----- became the first teacher to teach deaf students.	1
5.	Identify the type of family. 	1
6.	Mention the family that you prefer to live. Give a reason to support your answer.	2
7.	Read the passage answer the following :- Sidhu was not able to walk. He joined a special school where his father carried him on his back. Sidhu’s classmates, teachers and his physiotherapist helped him do physical exercise to strengthen his hand and leg muscles. He can move around the school on his wheel chair now! i) How Sidhu moved around the school? ii) If Sidhu is your neighbour, write the steps you would take to help him to overcome the difficulties that he might face.	1+2
8.	Complete the following boxes:- <u>Months Name</u> <u>Festivals’ Name</u> iv) August to September <input type="text"/>	5

	v) <input type="text"/> vi) December <input type="text"/> vii) <input type="text"/> viii) Ramadan	Holi <input type="text"/> Durgapuja <input type="text"/>	
9.	Mention the ways in which Braille script help the blind people to read and write.		5

Map Work:-

On a political map of India, locate, colour and label the following:

- iii) A state where Ganesh Chaturthi is famous.
- iv) Ladakh.
- v) State from which King Mahabali belonged.
- vi) A Northern state where you want to visit.

INDIA
Political Map of India
with States and Union Territories



- Project Work:-

Prepare a decorative mask of Pulikkali dance form.

(Suggested Materials to be used : Yellow Art Paper, Scissors, Colours, Ribbon)

D.A.V. PUBLIC SCHOOL, DVC, MTPS
HOLIDAY HOMEWORK
SESSION : 2024-2025

CLASS : IV

SUBJECT : BENGALI

সঠিক উত্তরটি বেছে লেখো :

১। বাল্মীকি কার সাথে তমসা নদীর ধারে ভ্রমণ করছিলেন?

- অ) ভগিনীর সাথে আ) শিষ্যের সাথে
ই) ভ্রাতার সাথে ঙ) গুরুর সাথে

২। মন্তব্য : বাল্মীকি ব্যাধকে অভিশাপ দিলেন।

যুক্তি : ব্যাধ নিরীহ পাখিটিকে হত্যা করেছিল।

- অ) মন্তব্য ও যুক্তি উভয়ই ভুল আ) মন্তব্য ও যুক্তি উভয়ই সঠিক
ই) মন্তব্য ঠিক যুক্তি ভুল ঙ) মন্তব্য ভুল যুক্তি ঠিক

৩। "এমন নিষ্ঠুর লোক হয়" - নিষ্ঠুর লোকটি কে?

- অ) ব্রহ্মা আ) দুষ্ট ব্যাধ
ই) বাল্মীকি ঙ) ভরদ্বাজ

৪। রাখালকে গুরুমশায় মাকাল বলেছিলেন কী বোঝাতে?

- অ) বুদ্ধিমান আ) পণ্ডিত
ই) গুণহীন ঙ) বিদ্বান

৫। মন্তব্য: রামকৃষ্ণ রানি রাসমণি কে চড় মারলেন

যুক্তি : রানি মা মন্দিরে এসে ধ্যান করছিলেন।

- অ) মন্তব্য ও যুক্তি উভয়ই ভুল আ) মন্তব্য ও যুক্তি উভয়ই সঠিক
ই) মন্তব্য ঠিক যুক্তি ভুল ঙ) মন্তব্য ভুল যুক্তি ঠিক

৬। রামকৃষ্ণের জন্মস্থান কামারপুকুর কোন্ জেলায় অবস্থিত?

অ) বর্ধমান

আ) হাওড়া

ই) বাঁকুড়া

ঈ) হুগলি

৭। কে বিবেকানন্দ নামে পরিচিত হয়েছিলেন?

অ) রমেশ দত্ত

আ) নরেন্দ্রনাথ দত্ত

ই) সত্যজিৎ রায়

ঈ) সুকুমার রায়

৮। মন্তব্য : সুবর্ণরেখা হল সংজ্ঞাবাচক বিশেষ্যের উদাহরণ।

যুক্তি : সুবর্ণরেখা একটি নির্দিষ্ট নদীর নাম।

অ) মন্তব্য ও যুক্তি উভয়ই ভুল

আ) মন্তব্য ও যুক্তি উভয়ই সঠিক

ই) মন্তব্য ঠিক যুক্তি ভুল

ঈ) মন্তব্য ভুল যুক্তি ঠিক

প্রশ্নগুলির যথাযথ উত্তর লেখো :

৯। 'এটা', 'ওটা' কোন্ প্রকারের সর্বনাম?

১০। পদগুলির মধ্যে পারস্পরিক সম্পর্ককে কী বলে?

প্রকল্প

১১। বিশেষ্য পদের শ্রেণিবিভাগটি সুন্দরভাবে উপস্থাপন কর(A4 size chart paper) :